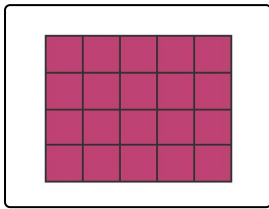


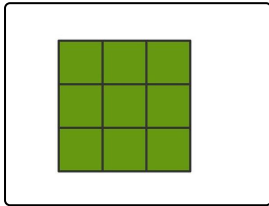


Wie viele Kästchen hat die jeweilige Form? Bestimme die Anzahl.

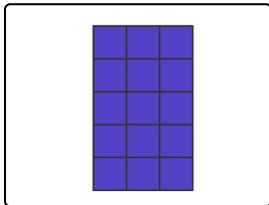
Verbinde die Elemente miteinander.



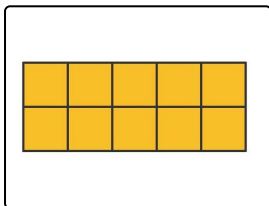
A



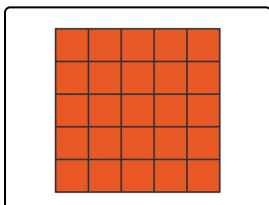
B



C



D



E

